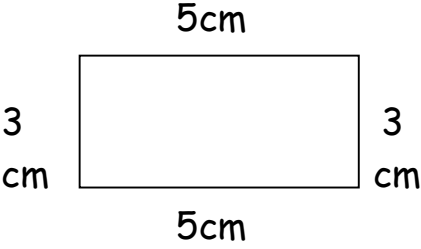
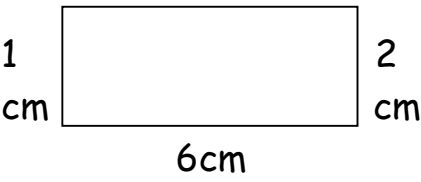
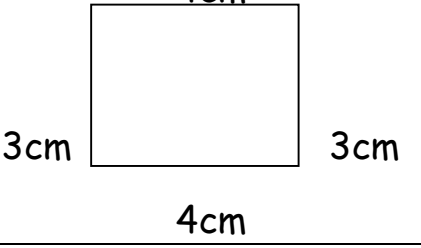
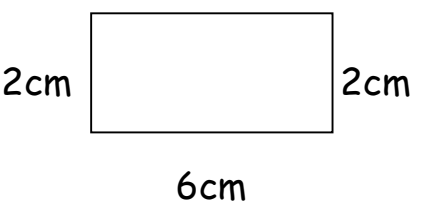
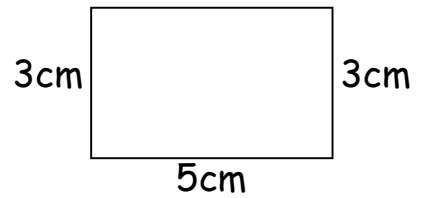


Perimeter and Area

RECTANGLE	PERIMETER	AREA
 <p>5cm 3 cm 3 cm 5cm</p>	___ cm	___ cm ²
 <p>6cm 1 cm 2 cm 6cm</p>	___ cm	___ cm ²
 <p>4cm 3cm 3cm 4cm</p>	___ cm	___ cm ²
 <p>6cm 2cm 2cm 6cm</p>	___ cm	___ cm ²
 <p>5cm 3cm 3cm 5cm</p>	___ cm	___ cm ²

Remember

Perimeter = the distance around the outside of the shape

Area = the space inside the shape