
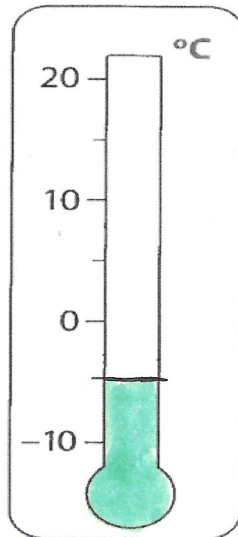


Temperature

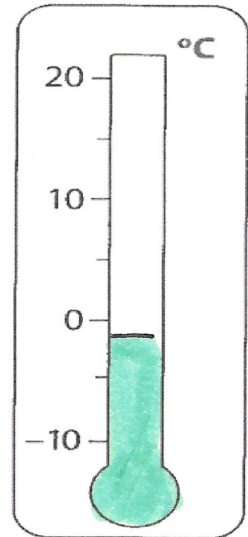
1. What is the temperature in these cities?



Swansea



London



Cardiff

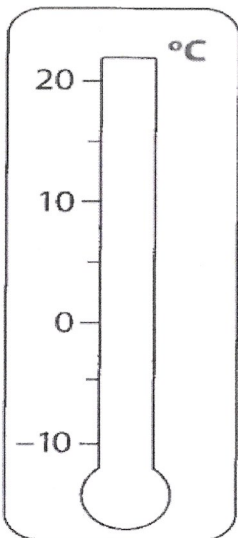
2. Write the temperatures from coldest to warmest?

-4°C

2°C

-10°C

8°C



The temperature in Manchester is 10°C. Show this temperature on the thermometer.

Which city is the hottest today?
