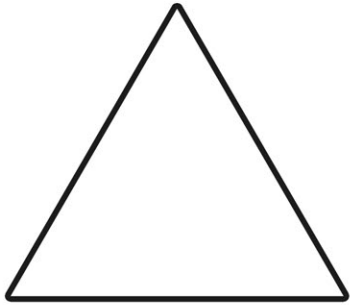



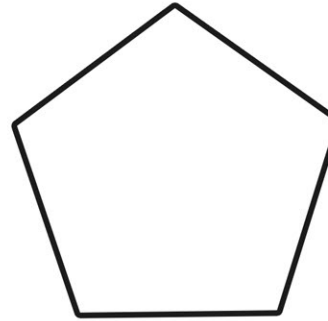
Investigating Lines of Symmetry



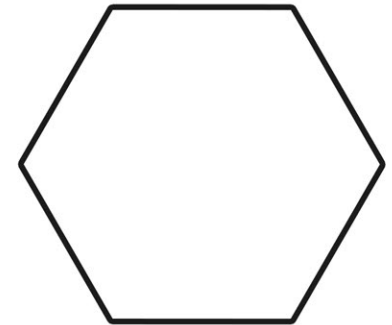
Name _____
 Sides _____
 Line of Symmetry _____



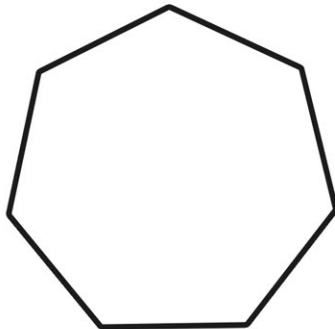
Name _____
 Sides _____
 Line of Symmetry _____



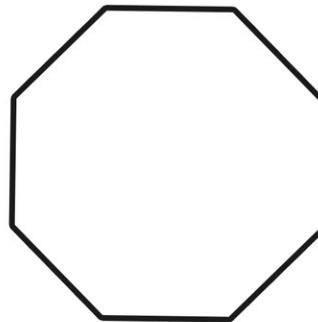
Name _____
 Sides _____
 Line of Symmetry _____



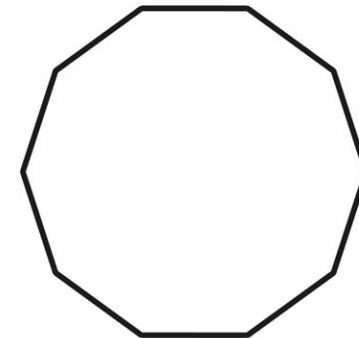
Name _____
 Sides _____
 Line of Symmetry _____



Name _____
 Sides _____
 Line of Symmetry _____

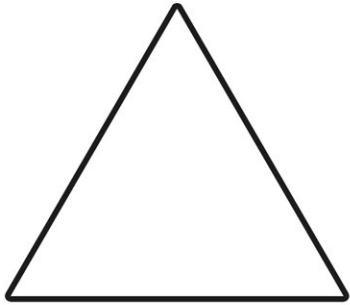


Name _____
 Sides _____
 Line of Symmetry _____




Name _____
 Sides _____
 Line of Symmetry _____

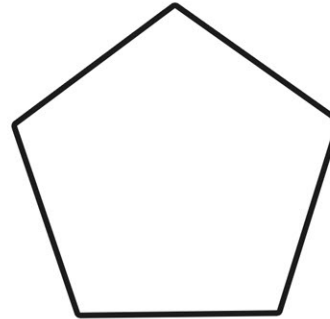
Investigating Lines of Symmetry



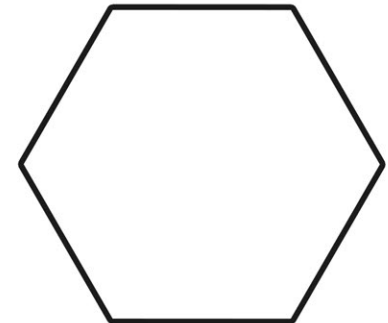
Name triangle (equilateral)
Sides 3
Line of Symmetry 3



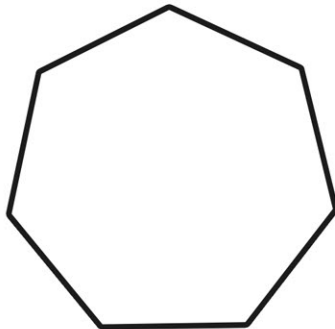
Name square
Sides 4
Line of Symmetry 4



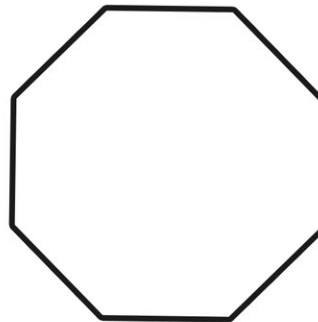
Name pentagon
Sides 5
Line of Symmetry 5



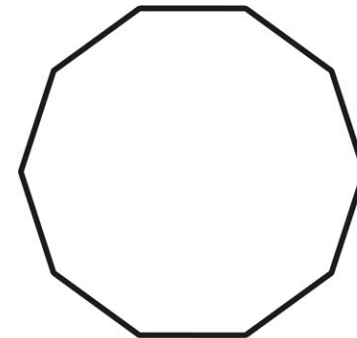
Name hexagon
Sides 6
Line of Symmetry 6



Name heptagon
Sides 7
Line of Symmetry 7



Name octagon
Sides 8
Line of Symmetry 8



Name decagon
Sides 10
Line of Symmetry 10