






Fluency Tasks (1) continued:

4) The pictogram shows the number of ice-creams that were eaten on a Saturday.

Colour	Number of children
green	
blue	
red	
purple	

**Key**  
 = 2 children

How many children voted for green and red?

---





Which colour was the least popular?


---

How many more children voted for purple and green than red?

---

5) The pictogram shows the number of books read over the half term holidays in year 3.

Colour	Number of books read
3E	
3D	
3N	
3S	

**Key**  
 = 6 books





Which class read the least number of books?


---

Which two classes read 45 books between them?

---

6) Write your own questions about the pictogram.

Class	Number of biscuits sold
3T	
3W	
3E	
3N	

**Key**  
 = 10 biscuits

---



---



---



---